

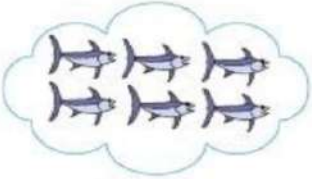

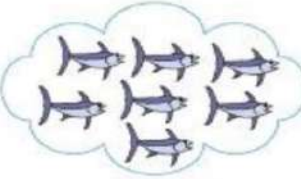






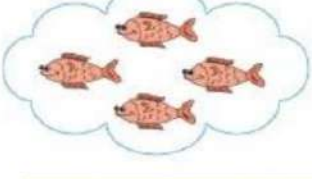


G.D. GOENKA PUBLIC SCHOOL, SRINAGAR







Subject: Mathematics

*Kindly note that this PDF is not to be printed.

Topic: Comparison of numbers

Put (>), (<) or (=) sign in the boxes given below.

Greater than, Less than or Equal to?

Directions: Write $<$, $>$, or $=$ to make each statement true. Remember alligators like to eat the bigger number!

$66 \square 56$

$27 \square 28$

$31 \square 79$

$17 \square 7$

$12 \square 21$

$64 \square 99$

$80 \square 44$

$50 \square 40$

$39 \square 95$

$84 \square 84$

Note: This is the content for the Topic 'Comparison of numbers'. Kindly guide your children to practice the same. This has been already taught in zoom class.